



Fill in the blanks to find the amounts.

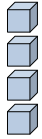
**Answers**

Ex)

1)

2)

Ex. 4



0

4

tens

ones

tens

ones

tens

ones

1. \_\_\_\_\_

2. \_\_\_\_\_

3. \_\_\_\_\_

4. \_\_\_\_\_

3)

4)

5)



tens

ones

tens

ones

tens

ones

5. \_\_\_\_\_

6. \_\_\_\_\_

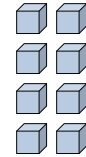
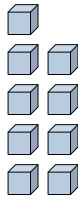
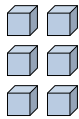
7. \_\_\_\_\_

8. \_\_\_\_\_

6)

7)

8)



tens

ones

tens

ones

tens

ones

9. \_\_\_\_\_

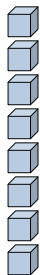
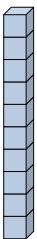
10. \_\_\_\_\_

11. \_\_\_\_\_

9)

10)

11)



tens

ones

tens

ones

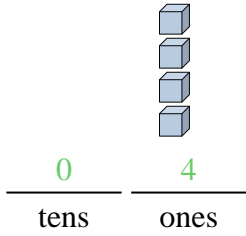
tens

ones

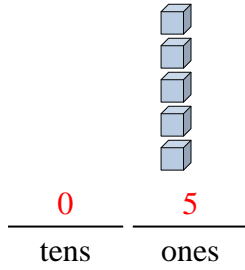


Fill in the blanks to find the amounts.

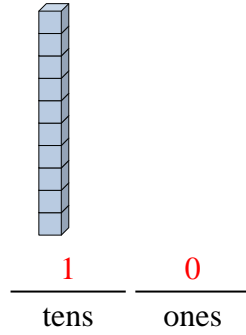
Ex)



1)



2)



Answers

Ex. 4

1. 5

2. 10

3. 9

4. 2

5. 11

6. 6

7. 19

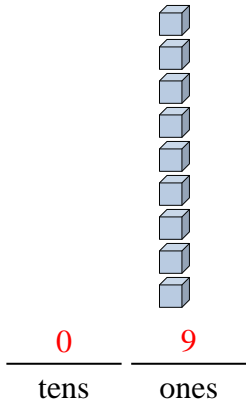
8. 18

9. 13

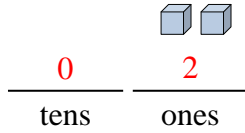
10. 8

11. 14

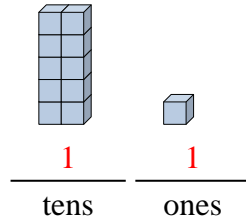
3)



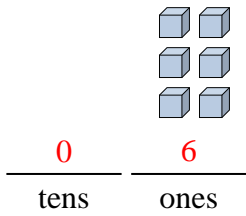
4)



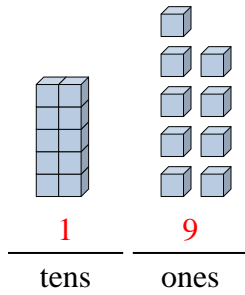
5)



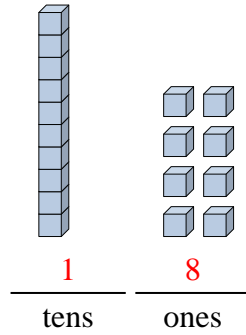
6)



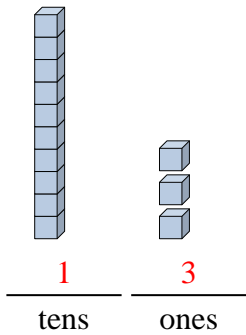
7)



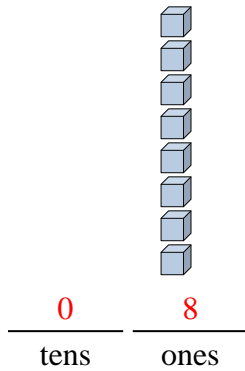
8)



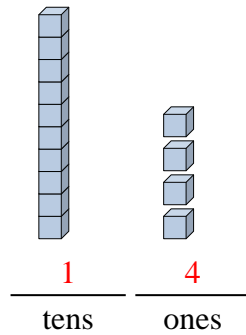
9)



10)



11)

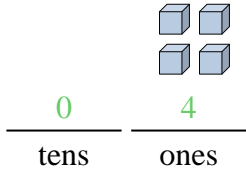




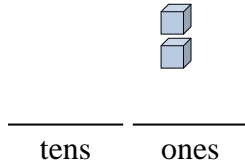
Fill in the blanks to find the amounts.

**Answers**

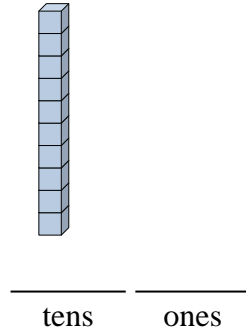
Ex)



1)



2)



Ex.     4    

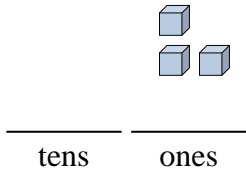
1. \_\_\_\_\_

2. \_\_\_\_\_

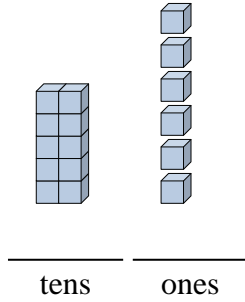
3. \_\_\_\_\_

4. \_\_\_\_\_

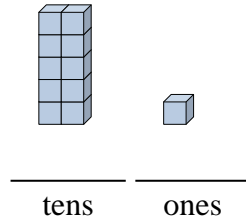
3)



4)



5)



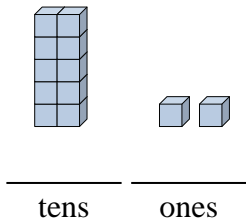
5. \_\_\_\_\_

6. \_\_\_\_\_

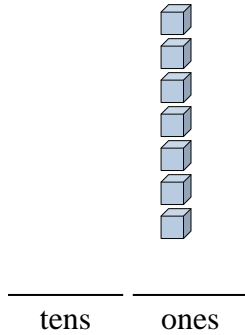
7. \_\_\_\_\_

8. \_\_\_\_\_

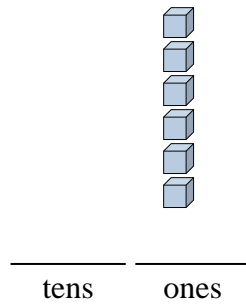
6)



7)



8)

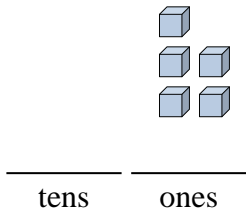


9. \_\_\_\_\_

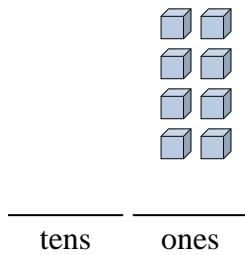
10. \_\_\_\_\_

11. \_\_\_\_\_

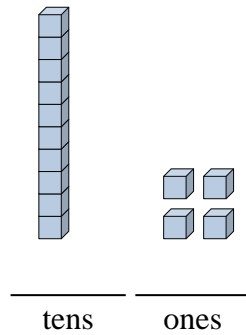
9)



10)



11)







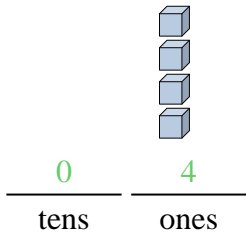




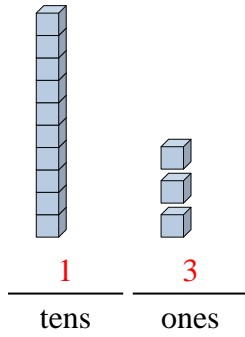


Fill in the blanks to find the amounts.

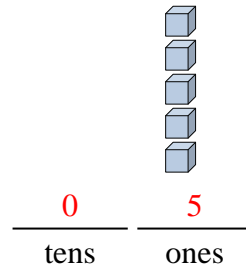
Ex)



1)



2)



Answers

Ex. 4

1. 13

2. 5

3. 16

4. 19

5. 12

6. 2

7. 9

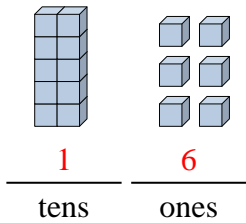
8. 7

9. 10

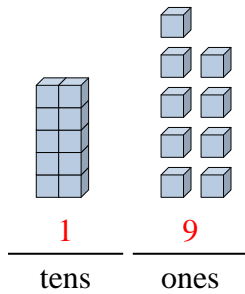
10. 17

11. 8

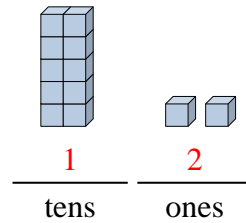
3)



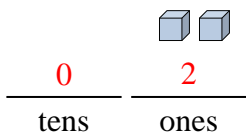
4)



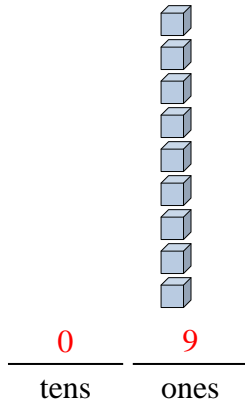
5)



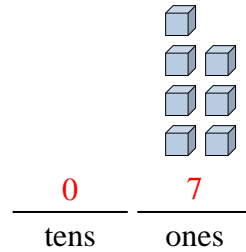
6)



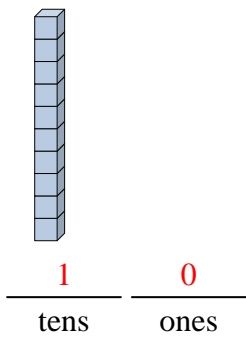
7)



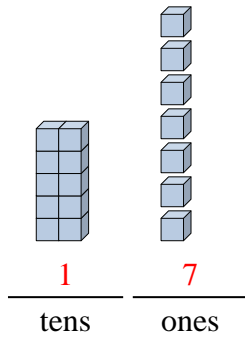
8)



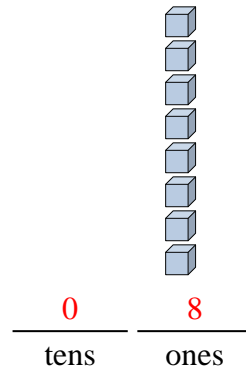
9)



10)



11)



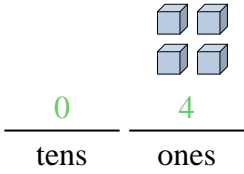




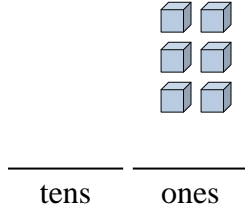
Fill in the blanks to find the amounts.

**Answers**

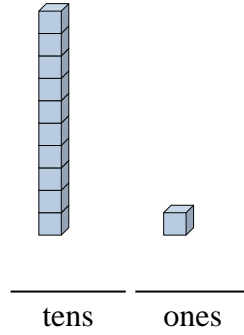
Ex)



1)



2)



Ex.     4    

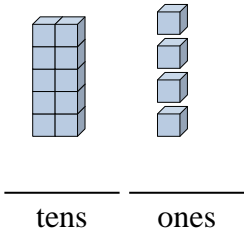
1. \_\_\_\_\_

2. \_\_\_\_\_

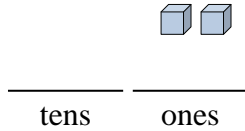
3. \_\_\_\_\_

4. \_\_\_\_\_

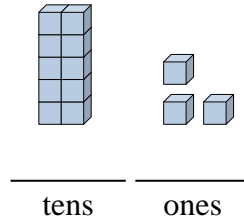
3)



4)



5)



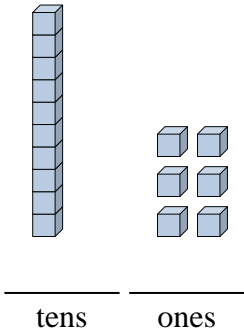
5. \_\_\_\_\_

6. \_\_\_\_\_

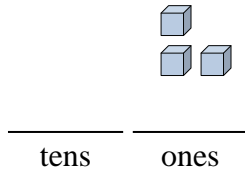
7. \_\_\_\_\_

8. \_\_\_\_\_

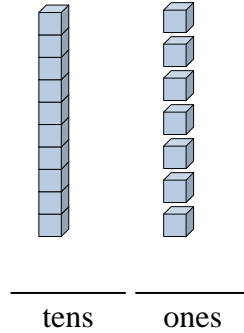
6)



7)



8)

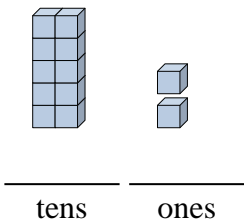


9. \_\_\_\_\_

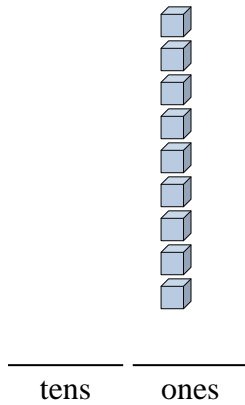
10. \_\_\_\_\_

11. \_\_\_\_\_

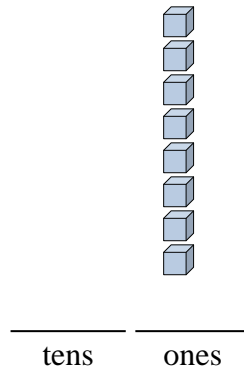
9)



10)



11)

















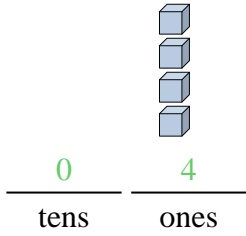




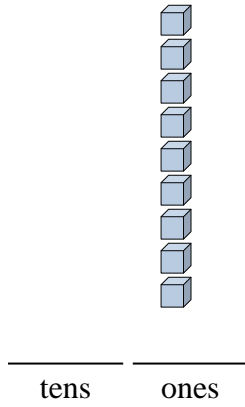
Fill in the blanks to find the amounts.

**Answers**

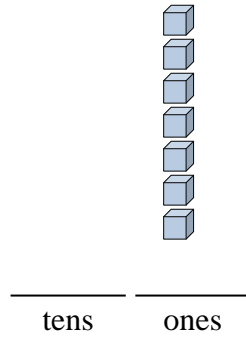
Ex)



1)



2)



Ex.     4    

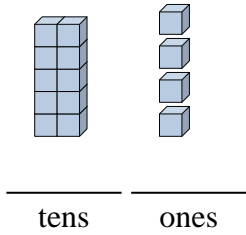
1. \_\_\_\_\_

2. \_\_\_\_\_

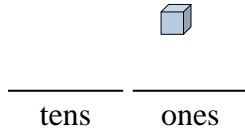
3. \_\_\_\_\_

4. \_\_\_\_\_

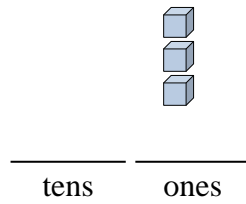
3)



4)



5)



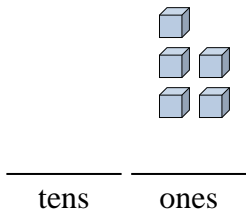
5. \_\_\_\_\_

6. \_\_\_\_\_

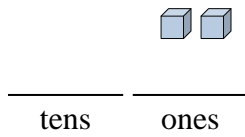
7. \_\_\_\_\_

8. \_\_\_\_\_

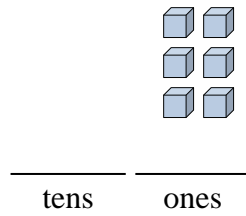
6)



7)



8)

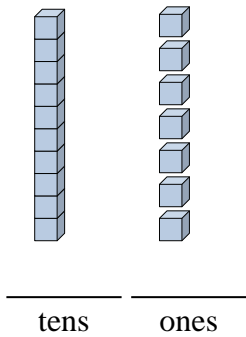


9. \_\_\_\_\_

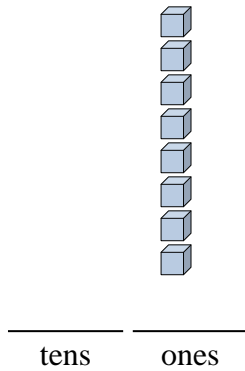
10. \_\_\_\_\_

11. \_\_\_\_\_

9)



10)



11)

